

A. Spoj každou stavbu se správným plánem.



| | |
|---|---|
| 2 | 2 |
| 2 | 2 |

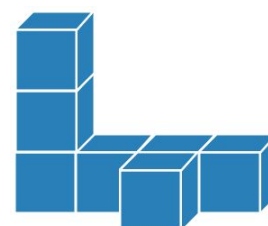

| | |
|---|---|
| 2 | 1 |
| 1 | |

| |
|---|
| 3 |
| 1 |

| | |
|---|---|
| 2 | 2 |
| 1 | 1 |

| | | |
|---|---|---|
| 2 | 1 | 1 |
| | 1 | |

B. Zapiš plán pro každou stavbu.



| | |
|--|--|
| | |
| | |


| | |
|--|--|
| | |
|--|--|

| | | | |
|--|--|--|--|
| | | | |
| | | | |

| | |
|--|--|
| | |
| | |

| | | | |
|--|--|--|--|
| | | | |
| | | | |

C. Kolik kostek bylo třeba na tyto stavby? Nápověda: Každá kostka leží buď na zemi nebo na jiné kostce.



___ kostek



___ kostek



___ kostek